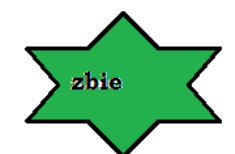
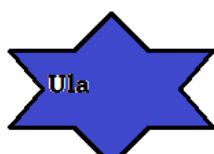


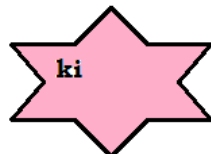
Odgadnij zdanie.



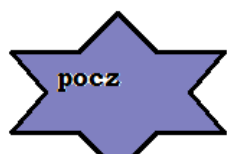
$$8+9=$$



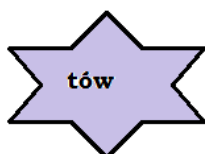
$$7+2=$$




$$6+5=$$



$$2+5=$$



$$4+8=$$



$$9+7=$$

9

17	16

7	12	11